

Number Recognition Practice

Name: _____ Date: _____

Have the student read the numbers on this page to confirm that they recognize each one correctly.

1 2 3 4 5 6

7 8 9 10 11 12

13 14 15 16 17 18

19 20 21 22 23 24





















25 1 2 3 4 5

6 7 8 9 10 11

Dice Counting


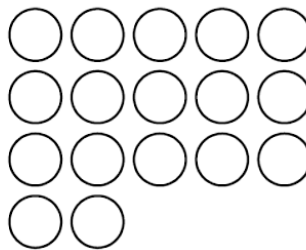
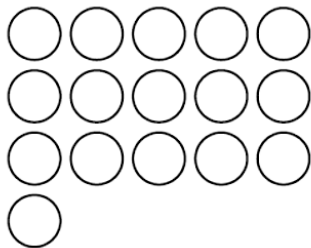
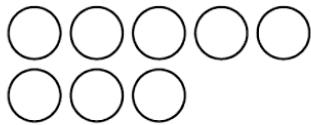
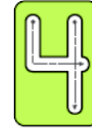


Name: _____ Date: _____

Count up the dots and write the number in each box.

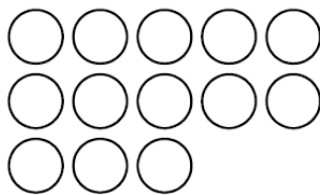
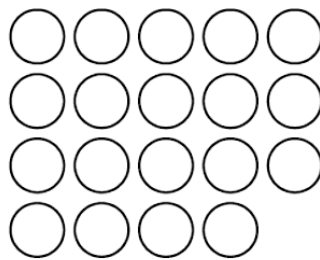

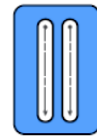
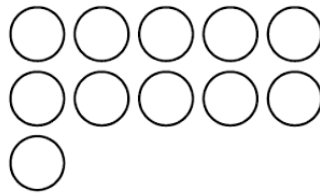
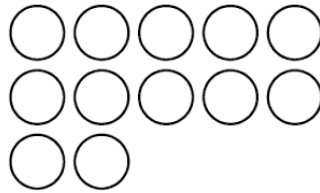

Small Number Counting

Name: _____ Date: _____



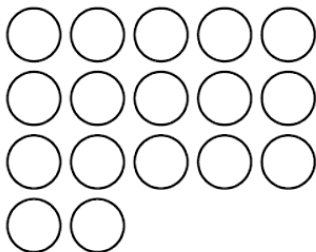
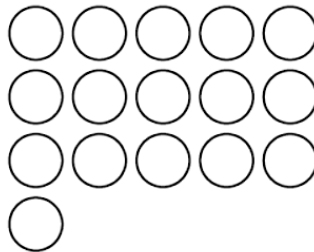

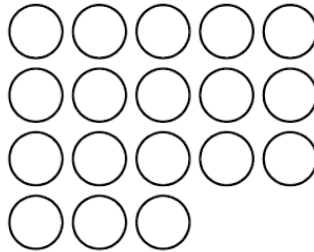

Small Number Counting

Name: _____ Date: _____



Small Number Counting

Name: _____ Date: _____



Numeric Neighbors

Name: _____ Date: _____

Write the numbers in the spaces that come before each number.

(1) _____, 37

(5) _____, 46

(9) _____, 17

(2) _____, 39

(6) _____, 34

(10) _____, 47

(3) _____, 29

(7) _____, 36

(11) _____, 28

(4) _____, 38

(8) _____, 19

(12) _____, 33

Write the numbers in the spaces that come after each number.

(13) 39, _____

(17) 24, _____

(21) 12, _____

(14) 48, _____

(18) 19, _____

(22) 15, _____

(15) 31, _____

(19) 13, _____

(23) 18, _____

(16) 6, _____

(20) 32, _____

(24) 40, _____

Write the numbers in the spaces that belong between each pair of numbers.

(25) 43, _____, 45

(29) 33, _____, 35

(33) 9, _____, 11

(26) 18, _____, 20

(30) 47, _____, 49

(34) 22, _____, 24

(27) 8, _____, 10

(31) 15, _____, 17

(35) 32, _____, 34

(28) 27, _____, 29

(32) 39, _____, 41

(36) 42, _____, 44

Numeric Neighbors

Name: _____ Date: _____

Write the numbers in the spaces that come before each number.

(1) _____, 8

(5) _____, 19

(9) _____, 13

(2) _____, 7

(6) _____, 15

(10) _____, 17

(3) _____, 12

(7) _____, 10

(11) _____, 16

(4) _____, 14

(8) _____, 20

(12) _____, 3

Write the numbers in the spaces that come after each number.

(13) 8, _____

(17) 9, _____

(21) 10, _____

(14) 6, _____

(18) 11, _____

(22) 19, _____

(15) 13, _____

(19) 12, _____

(23) 15, _____

(16) 4, _____

(20) 2, _____

(24) 7, _____

Write the numbers in the spaces that belong between each pair of numbers.

(25) 7, _____, 9

(29) 5, _____, 7

(33) 12, _____, 14

(26) 3, _____, 5

(30) 18, _____, 20

(34) 16, _____, 18

(27) 13, _____, 15

(31) 9, _____, 11

(35) 8, _____, 10

(28) 2, _____, 4

(32) 17, _____, 19

(36) 10, _____, 12